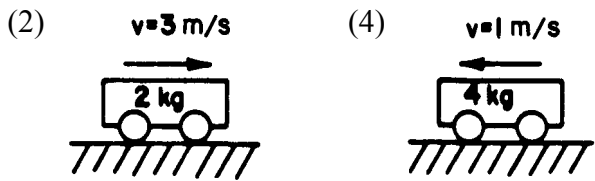
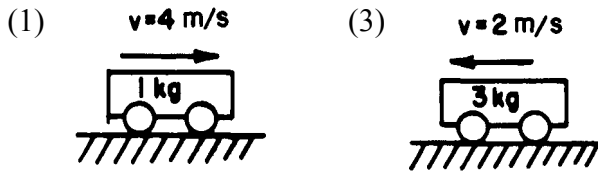


1. If the velocity of a moving object is doubled, the object's kinetic energy is

- (1) unchanged (3) doubled
 (2) halved (4) quadrupled

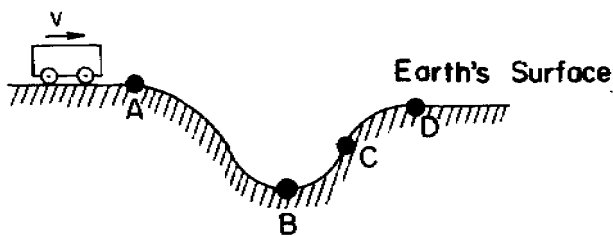
2. Which cart shown below has the greatest kinetic energy?



3. As a block is accelerated from rest along a horizontal surface, its gravitational potential energy

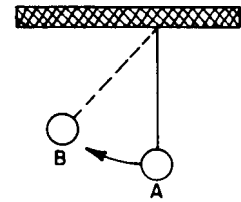
- (1) decreases (3) remains the same
 (2) increases

4. The diagram below represents a cart traveling from left to right along a frictionless surface with an initial speed of v . At which point is the gravitational potential energy of the cart *least*?



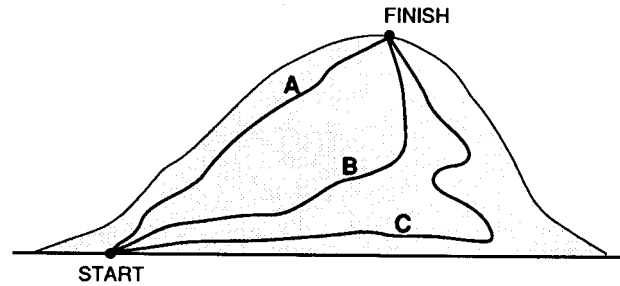
- (1) *A* (3) *C*
 (2) *B* (4) *D*

5. As the pendulum swings freely from *A* to *B* as shown in the diagram to the right, the gravitational potential energy of the ball



- (1) decreases (3) remains the same
 (2) increases

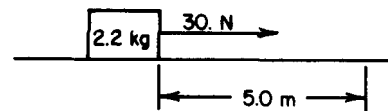
6. Three people of equal mass climb a mountain using paths *A*, *B*, and *C* shown in the diagram below.



Along which path(s) does a person gain the greatest amount of gravitational potential energy from start to finish?

- (1) *A*, only
 (2) *B*, only
 (3) *C*, only
 (4) The gain is the same along all paths.

7. A 2.2-kilogram mass is pulled by a 30.-newton force through a distance of 5.0 meters as shown in the diagram below. What amount of work is done?



- (1) 11 J (3) 150 J
 (2) 66 J (4) 330 J

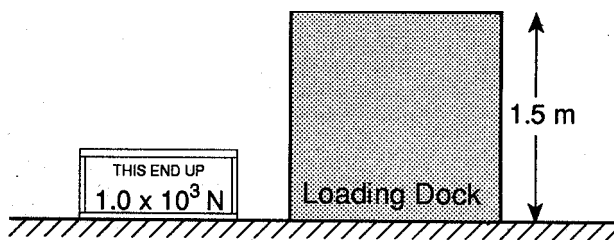
8. Which action would require no work to be done on an object?
- (1) lifting the object from the floor to the ceiling
 - (2) pushing the object along a horizontal floor against a frictional force
 - (3) decreasing the speed of the object until it comes to rest
 - (4) holding the object stationary above the ground

9. A box is dragged up an incline a distance of 8 meters with a force of 50 Newtons. If the increase in potential energy of the box is 300 joules, the work done against friction is
- (1) 100 J
 - (2) 200 J
 - (3) 300 J
 - (4) 400 J

10. An electrical heater raises the temperature of a measured quantity of water. The water absorbs 6,000 joules of energy from the heater in 30.0 seconds. What is the minimum power supplied to the heater?
- (1) 5.00×10^2 W
 - (2) 2.00×10^2 W
 - (3) 1.80×10^5 W
 - (4) 2.00×10^3 W

11. How long would it take a machine to do 5,000 joules of work if the power rating of the machine is 100 watts?
- (1) 5,000 sec
 - (2) 50 sec
 - (3) 10 sec
 - (4) 0.2 sec

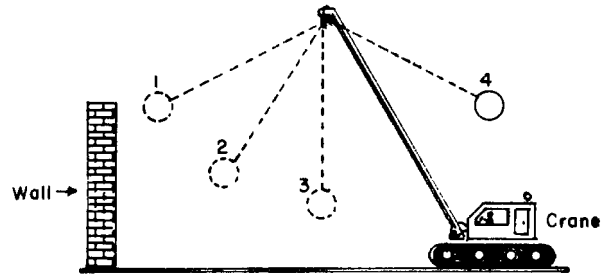
12. The diagram below shows a 1.0×10^3 -Newton crate to be lifted at constant speed from the ground to a loading dock 1.5 meters high in 5.0 seconds.



What power is required to lift the crate?

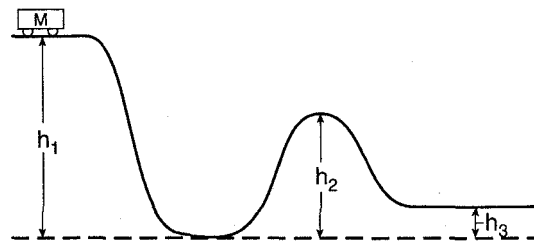
- (1) 1.5×10^3 W
- (2) 2.0×10^2 W
- (3) 3.0×10^2 W
- (4) 7.5×10^3 W

13. The wrecking crane shown below is moving toward a brick wall which is to be torn down.



At what point in the swing of the wrecking ball should the ball make contact with the wall to make a collision with the greatest kinetic energy?

- (1) 1
 - (2) 2
 - (3) 3
 - (4) 4
14. A cart of mass M on a frictionless track starts from rest at the top of a hill having height h_1 , as shown in the diagram below.



What is the kinetic energy of the cart when it reaches the top of the next hill, having height h_2 ?

- (1) mgh_1
 - (2) $Mg(h_1 - h_2)$
 - (3) $Mg(h_2 - h_3)$
 - (4) 0
15. The work done in accelerating an object along a frictionless horizontal surface is equal to the object's change in
- (1) momentum
 - (2) velocity
 - (3) potential energy
 - (4) kinetic energy

Answer Key

1. 4

2. 2

3. 3

4. 2

5. 2

6. 4

7. 3

8. 4

9. 1

10. 2

11. 2

12. 3

13. 3

14. 2

15. 4
